
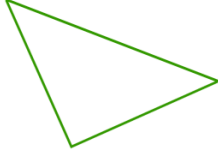
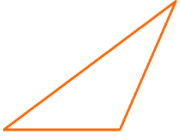

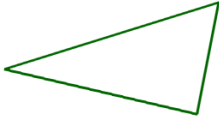


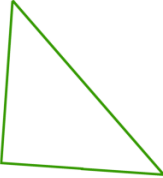



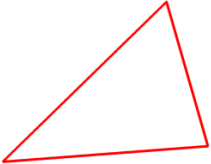





Name: _____ Date: _____

Classify Triangles Worksheet

Classify the triangles by their sides (equilateral, isosceles, scalene).

1 a. 	1 b. 	1 c. 
2 a. 	2 b. 	2 c. 
3 a. 	3 b. 	3 c. 
4 a. 	4 b. 	4 c. 
5 a. 	5 b. 	5 c. 

Name: _____ Date: _____

Answer Key

1 a. isosceles

1 b. isosceles

1 c. scalene

2 a. equilateral

2 b. scalene

2 c. isosceles

3 a. isosceles

3 b. isosceles

3 c. scalene

4 a. isosceles

4 b. scalene

4 c. scalene

5 a. isosceles

5 b. isosceles

5 c. equilateral