

In the Wild Heights

Look at the pictures of different wild animals.

The **heights shown** (not to scale) for the animals in the pictures is **much smaller** than the **actual height** in real life.

Work out the **real height** of each wild animal.

Armadillo




This is $\frac{1}{3}$ of the real height.

7cm	7cm	7cm
-----	-----	-----

What is the real height? **21 cm.**

Squirrel




This is $\frac{1}{4}$ of the real height.

3cm	3cm	3cm	3cm
-----	-----	-----	-----

What is the real height? **12cm.**

Racoon



This is $\frac{1}{4}$ of the real height.

6cm	6cm	6cm	6cm
-----	-----	-----	-----

What is the real height? **24cm.**

Tiger



This is $\frac{1}{4}$ of the real height.

30cm	30cm	30cm	30cm
------	------	------	------

What is the real height? **120cm.**

Sloth




This is $\frac{1}{5}$ of the real height.

16cm	16cm	16cm	16cm	16cm
------	------	------	------	------

What is the real height? **80cm.**

Male Lion




This is $\frac{1}{3}$ of the real height.

60cm	60cm	60cm
------	------	------

What is the real height? **180cm.**

Meerkat



This is $\frac{1}{4}$ of the real height.

7cm	7cm	7cm	7cm
-----	-----	-----	-----

What is the real height? **28cm.**

Jaguar




This is $\frac{1}{5}$ of the real height.

15cm	15cm	15cm	15cm	15cm
------	------	------	------	------

What is the real height? **75cm.**

Rhesus monkey



This is $\frac{1}{5}$ of the real height.

10cm	10cm	10cm	10cm	10cm
------	------	------	------	------

What is the real height? **50cm.**

Giant panda



This is $\frac{1}{5}$ of the real height.

18cm	18cm	18cm	18cm	18cm
------	------	------	------	------

What is the real height? **90cm.**