

In the Wild Heights

Look at the pictures of different wild animals.

The **heights shown** (not to scale) for the animals in the pictures is **much smaller** than the **actual height** in real life.

Work out the **real height** of each wild animal.

Armadillo




This is $\frac{1}{3}$ of the real height.

7cm		
-----	--	--

What is the real height? _____.

Squirrel



This is $\frac{1}{4}$ of the real height.

3cm			
-----	--	--	--

What is the real height? _____.

Racoon



6 cm

This is $\frac{1}{4}$ of the real height.

6cm			
-----	--	--	--

What is the real height? _____.

Tiger



30cm

This is $\frac{1}{4}$ of the real height.

30cm			
------	--	--	--

What is the real height? _____.

Sloth



16cm

This is $\frac{1}{5}$ of the real height.

16cm				
------	--	--	--	--

What is the real height? _____.

Male Lion




60cm

This is $\frac{1}{3}$ of the real height.

60cm		
------	--	--

What is the real height? _____.

Meerkat




This is $\frac{1}{4}$ of the real height.

7cm			
-----	--	--	--

What is the real height? _____.

Jaguar




This is $\frac{1}{5}$ of the real height.

15cm				
------	--	--	--	--

What is the real height? _____.

Rhesus monkey



This is $\frac{1}{5}$ of the real height.

10cm				
------	--	--	--	--

What is the real height? _____.

Giant panda



This is $\frac{1}{5}$ of the real height.

18cm				
------	--	--	--	--

What is the real height? _____.